

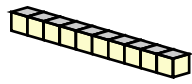
Name : _____

Score : _____

Teacher : _____

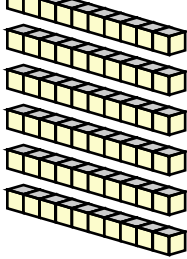
Date : _____



Find the value of each group of base ten blocks.



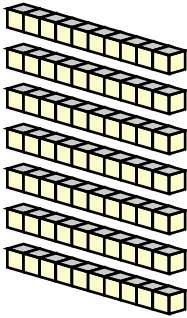
$= 10$





$\square = 1$

1) 

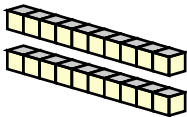
_____		_____
Tens		Ones
		







		Total

5) 

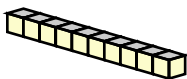
_____		_____
Tens		Ones
		
		
		








		Total

2) 

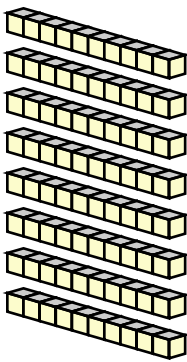
_____		_____
Tens		Ones
		
		
		
		
		


		Total

6) 

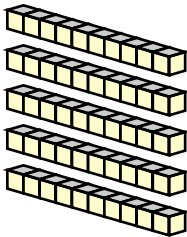
_____		_____
Tens		Ones
		
		
		
		
		
		






		Total

3) 

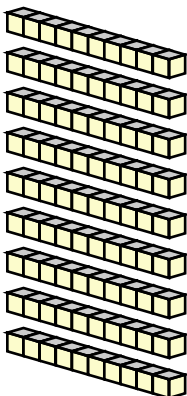
_____		_____
Tens		Ones










		Total

7) 

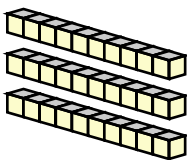
_____		_____
Tens		Ones
		
		
		
		










		Total

4) 

_____		_____
Tens		Ones
		
		
		
		
		
		
		
		

		Total

8) 

_____		_____
Tens		Ones
		
		
		
		
		
		
		
		

		Total

