

Name : _____

Score : _____


Teacher : _____

Date : _____


Find the value of each group of base ten blocks.




= 10

 = 1

1)




5)



2)




6)



3)



7)



4)



8)

